

空間把握 上級

なまえ

5


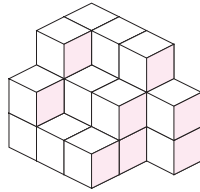
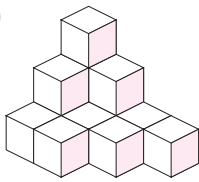
積み木

目標時間は5分

分 秒

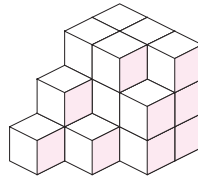
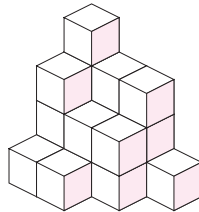
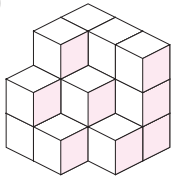
Q 積み木を3つに分けてなればます。3つの積み木の合計は何個ですか。
(複雑な形は、頭の中で数えやすい形に移動してから数えましょう。)

(1)



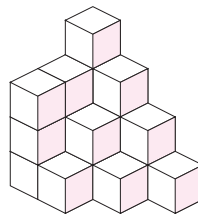
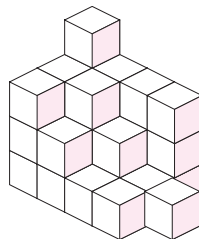
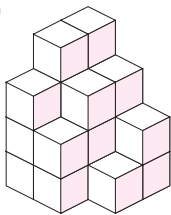
個

(2)



個

(3)



個

