

小学5年生
四角形や多角形の
角の大きさの和 (2)

日にち

月

日

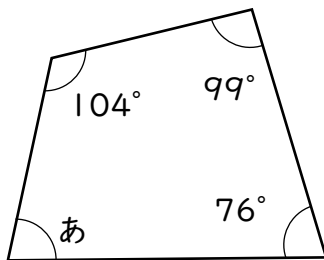
名前

四角形の内角の和 = 360°

□角形の内角の和 = $180 \times (\square - 2)$

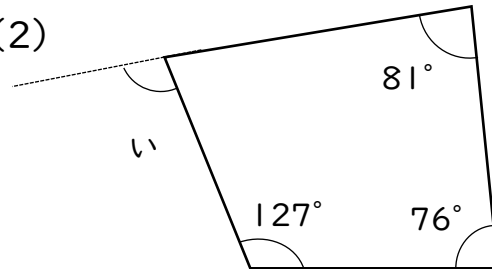
◆次の図で、あ~かの角の大きさを求めましょう。

(1)



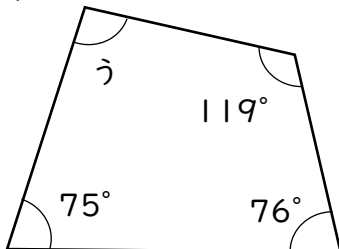
(81°)

(2)



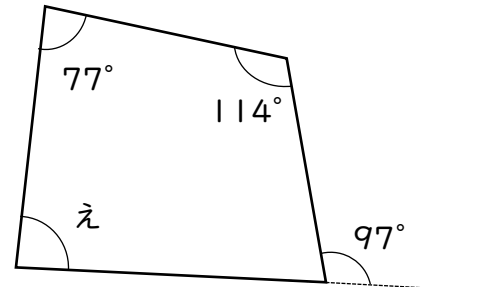
(104°)

(3)



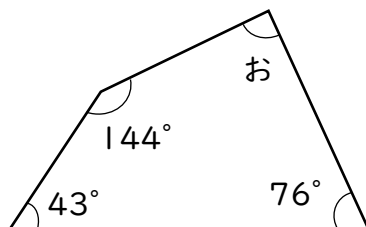
(90°)

(4)



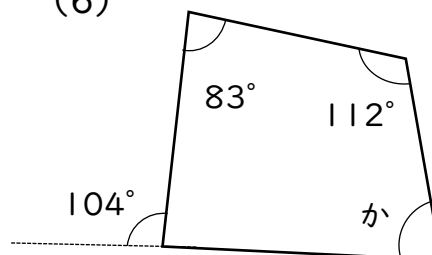
(86°)

(5)



(97°)

(6)



(89°)