

小4算数

角の書き方(2)

ひにち

がつ

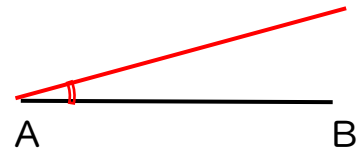
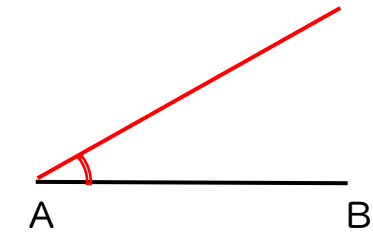
にち

なまえ

◆ 点Aを中心として 次の角を書きましょう。

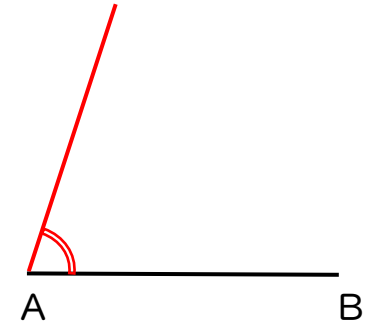
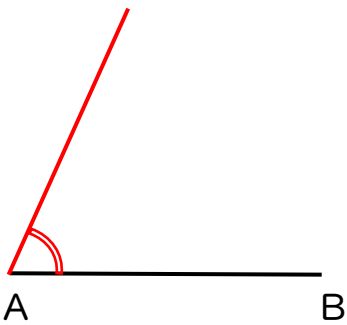
(1) 30°

(2) 15°



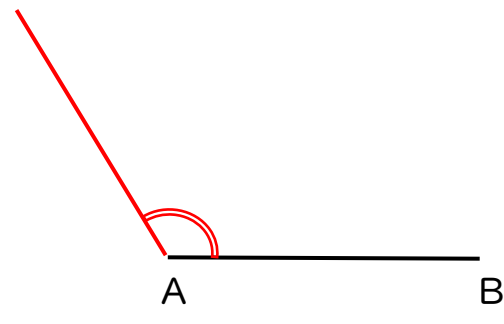
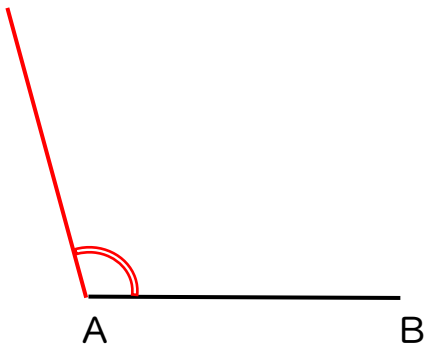
(3) 65°

(4) 72°



(5) 105°

(6) 123°



(7) 145°

(8) 160°

